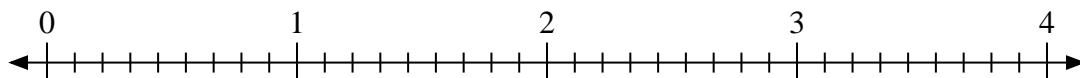


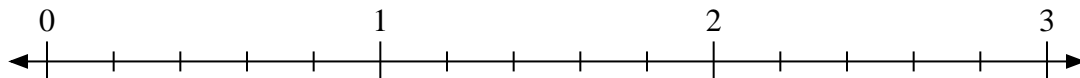


Use the numberline to solve.


1) $4 \div \frac{3}{9}$



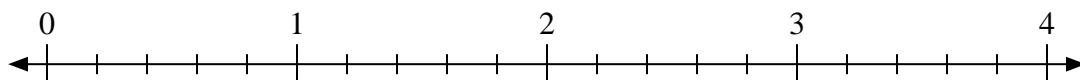
2) $3 \div \frac{4}{5}$



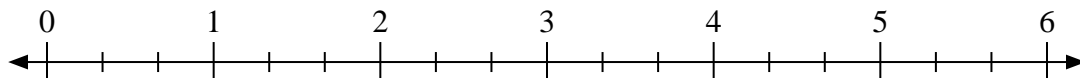
3) $3 \div \frac{2}{3}$



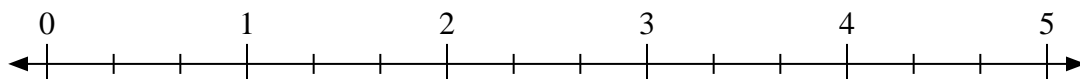
4) $4 \div \frac{4}{5}$



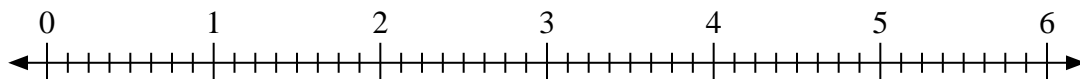
5) $5 \div \frac{2}{3}$



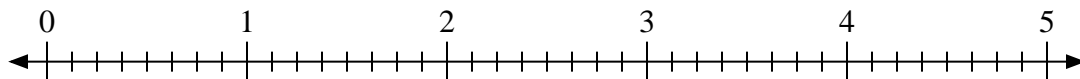
6) $2 \div \frac{1}{3}$



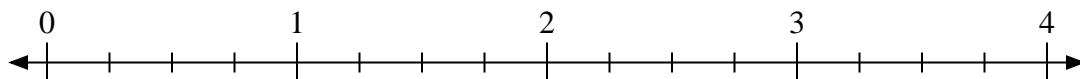
7) $4 \div \frac{4}{8}$



8) $4 \div \frac{4}{8}$



9) $4 \div \frac{1}{4}$



Answers

1. _____

2. _____

3. _____

4. _____

5. _____

6. _____

7. _____

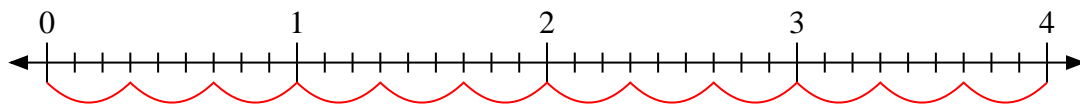
8. _____

9. _____

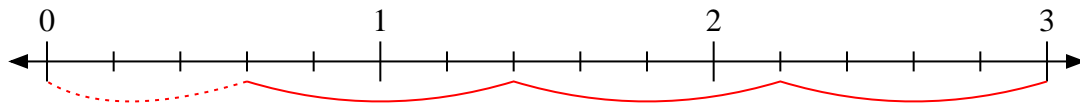


Use the numberline to solve.

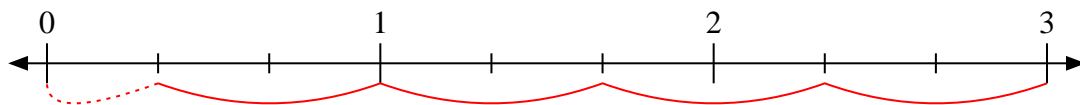
1) $4 \div \frac{3}{9}$



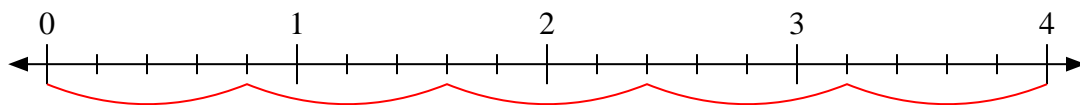
2) $3 \div \frac{4}{5}$



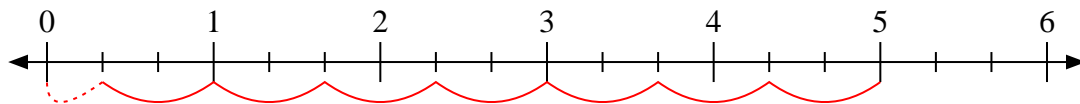
3) $3 \div \frac{2}{3}$



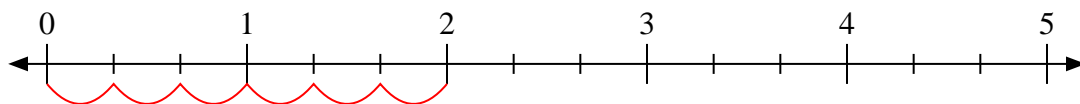
4) $4 \div \frac{4}{5}$



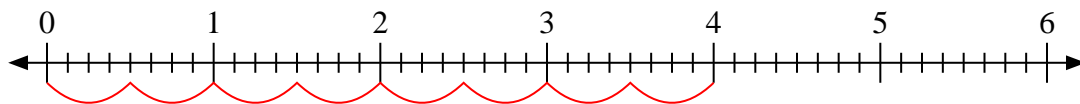
5) $5 \div \frac{2}{3}$



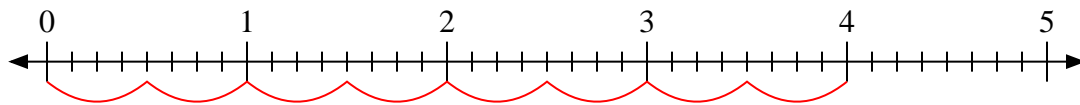
6) $2 \div \frac{1}{3}$



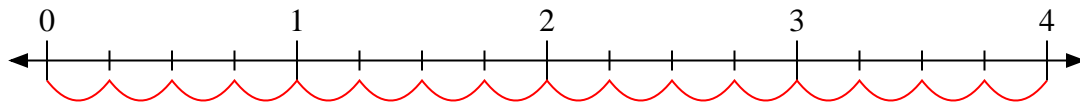
7) $4 \div \frac{4}{8}$



8) $4 \div \frac{4}{8}$



9) $4 \div \frac{1}{4}$



Answers

1. 12

2. $3 \frac{3}{4}$

3. $4 \frac{1}{2}$

4. 5

5. $7 \frac{1}{2}$

6. 6

7. 8

8. 8

9. 16